









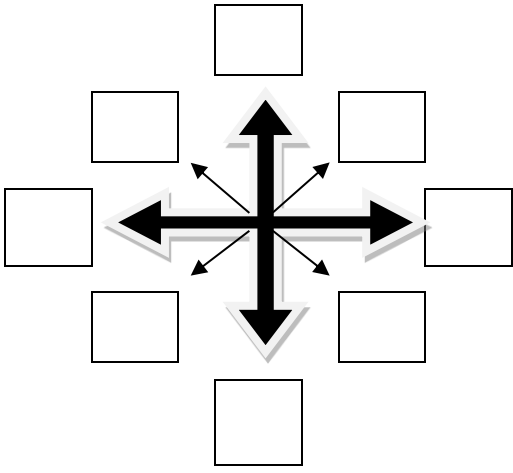
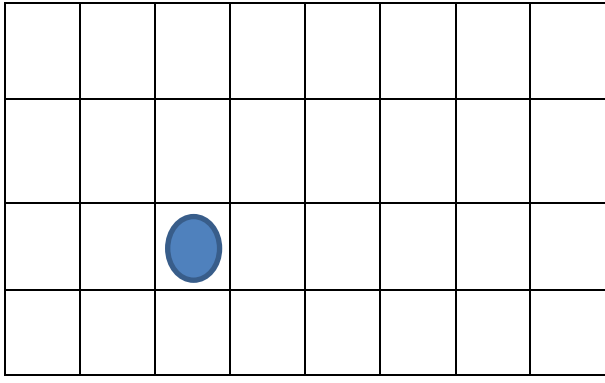













1. GRIDS: Describing location (5 marks)					Answer
					(a) What is in the square second from the right on the top line?
					(b) What is in the bottom left corner?
					(c) What is in the middle square?
					(d) Put an 'X' above the 'star' and next to the 'book'.
					(e) Colour the square fourth from the top and second from the right blue.


2. COMPASS: Compass points and direction (4 marks & 1 mark)	
(a) Place the missing compass points	(b) Move the counter by the following directions below. Colour the path of the counter. Move: 2 right, 1 up, 3 left and 1 down.
	

3. MAPPING: Compass points on a map (5 marks)					Answer
					(a) What is north of the whale?
					(b) What is south-west of the lighthouse?
					(c) What is north-east of the fire?
					(d) Which direction is the hut from the whale?
					(e) Place an X north of the ship and west of the palm tree.

4.	OPPOSITES: write the opposite for the following (5 marks)				
(a)	up =	(b)	left =	(c)	horizontal =
(d)	south =	(e)	north-west =		

1. GRIDS: Describing location (5 marks)					Answer	
					(a) What is in the square second from the right on the top line?	bell
			X		(b) What is in the bottom left corner?	sun
					(c) What is in the middle square?	nothing
					(d) Put an 'X' above the 'star' and next to the 'book'.	
					(e) Colour the square fourth from the top and second from the right blue.	

2. COMPASS: Compass points and direction (4 marks & 1 mark)	
(a) Place the missing compass points	(b) Move the counter by the following directions below. Colour the path of the counter. Move: 2 right, 1 up, 3 left and 1 down.

3. MAPPING: Compass points on a map (5 marks)		Answer	
	(a)	What is north of the whale?	fire
	(b)	What is south-west of the lighthouse?	ship
	(c)	What is north-east of the fire?	flag
	(d)	Which direction is the hut from the whale?	north-east
	(e)	Place an 'X' north of the ship and west of the palm tree.	

4.	OPPOSITES: write the opposite for the following (5 marks)				
(a)	up = down	(b)	left = right	(c)	horizontal = vertical
(d)	south = north	(e)	north-west = south-east		